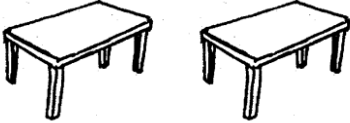




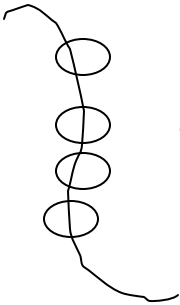
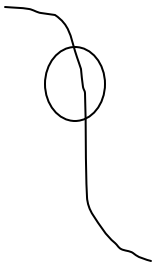

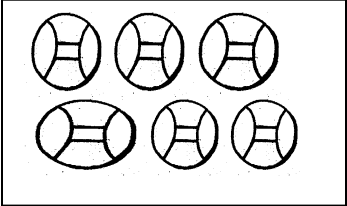
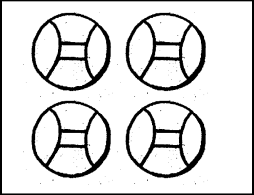


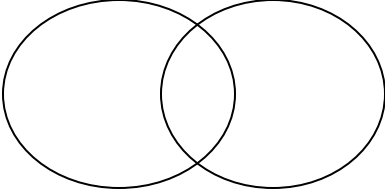



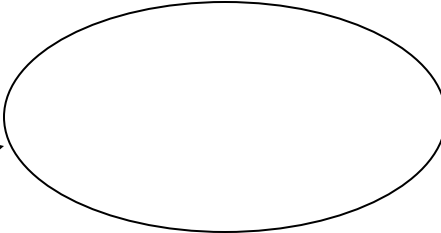

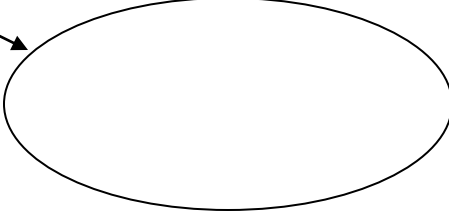
SECTION A (40MARKS)











1	<p>Name the set</p> <div data-bbox="329 336 810 506"></div> <p>A set of _____</p>
2	<p>Count and write the number.</p> <div data-bbox="329 714 940 930"></div> <p>= _____</p>
3	<p>Add the sets.</p> <div data-bbox="319 1098 690 1291"></div> <p>+</p> <div data-bbox="776 1098 971 1306"></div> <p>=</p> <div data-bbox="1042 1037 1481 1415"></div>
4	<p>Put the beads together.</p> <div data-bbox="289 1535 716 1837"></div> <p>+</p> <div data-bbox="565 1549 716 1810"></div> <p>=</p> <div data-bbox="979 1514 1474 1797"></div>

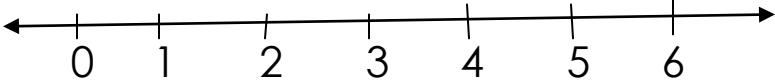
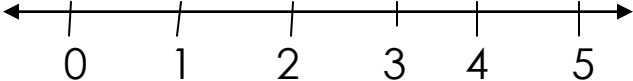
13	Add: 5 0 +6	14	How many days make a week?
15	Subtract. <div style="display: flex; align-items: center; justify-content: center;"> <div style="border: 1px solid black; padding: 5px; margin: 5px;">  </div> - <div style="border: 1px solid black; padding: 5px; margin: 5px;">  </div> = <div style="border: 1px solid black; border-radius: 50%; width: 200px; height: 200px; margin: 5px;"></div> </div>		
16	Use more or less <div style="display: flex; justify-content: space-around; align-items: flex-start; margin-top: 10px;"> <div style="text-align: center;"> <p>X</p> <div style="border: 1px solid black; padding: 5px;">  </div> </div> <div style="text-align: center;"> <p>Y</p> <div style="border: 1px solid black; padding: 5px;">  </div> </div> </div>		
	Set X has _____ members than set Y		
17	Set Y has _____ members than set X		
18	Write the number in words. 7 = _____		

19	<p>How many circles do you see?</p>  <p>_____</p>	20	<p>Draw the symbol for an empty set.</p>
----	--	----	--

SECTION B (60 MARKS)

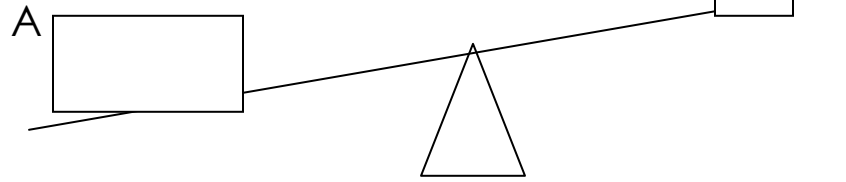
21	<p>Count and form new sets.</p> <div style="display: flex; align-items: center;">  <div style="margin-left: 20px;">    </div> </div>
22	<p>Add</p> <p style="margin-left: 40px;">$5 + 5 = \underline{\hspace{2cm}}$</p> <p style="margin-left: 40px;">$4 + 1 + 2 = \underline{\hspace{2cm}}$</p>

23	<p>Fill in the missing number.</p> <p>2, 4, _____, 6, _____</p> <p>17, 18, _____, 20 _____</p> <p>9, _____, _____, 12</p>						
24	<p>How many eyes do 2 boys have?</p>						
b	<p>How many legs do 5 stools have?</p> <div><div></div><div>= _____</div></div>						
25	<p>Draw these shapes.</p> <table><tr><td></td><td></td><td></td></tr><tr><td>square</td><td>kite</td><td>oval</td></tr></table>				square	kite	oval
							
square	kite	oval					

26	<p>Write the days correctly.</p> <p>nesdayWe _____</p> <p>dayMon _____</p> <p>Tuesday _____</p> <p>daySun _____</p>
27	<p>Add on a number line.</p> <p>$2 + 3 = \underline{\quad}$</p>  <p>$2 + 1 = \underline{\quad}$</p> 
28	<p>Match correctly</p> <div style="display: flex; justify-content: space-around; align-items: flex-start;"> <div style="border: 1px solid black; padding: 10px; width: 150px;"> $2 + 0$ $5 + 5$ $1 + 8$ </div> <div style="border: 1px solid black; padding: 10px; width: 150px;"> 9 2 10 </div> </div>

29

Use heavier or lighter.



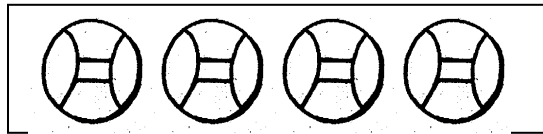
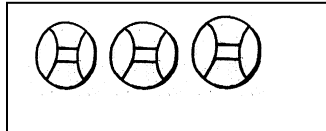
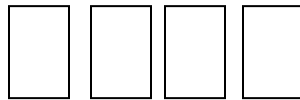
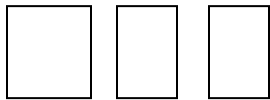
Box A is _____ than box B

30

Box b is _____ than box A

31

Join the objects.



32	Eight minus two = _____ Ten minus three = _____ Twelve minus eleven = _____
----	---

End